

# Hudební nauka 16.12. 4.ročník


1. Jak jdou durové stupnice s # za sebou?

2. Jak jdou durové stupnice s béčky za sebou?

3. Jak jdou mollové stupnice s # za sebou?

4. Jak jdou mollové stupnice s béčky za sebou?

5. Utvoř intervaly od daného tónu:




A musical staff in treble clef showing a sequence of notes and intervals. The notes are: G (labeled v.3), A (labeled č.5), B (labeled v.2), C (labeled v.6), D (labeled v.7), E (labeled č.4), F (labeled č.8), and G (labeled č.1).

6. Co je to za interval?



A musical staff in treble clef showing a sequence of notes and accidentals: Bb, C, D, E, F#, G#, Ab, Bb, C, D, E, F, G, A, B.


7. Utvoř kvintakord, sextakord i kvartsextakord



A musical staff in treble clef with empty lines for chord construction.

a) G dur

b) F dur



A musical staff in treble clef with empty lines for chord construction.

c) E dur

d) Es dur

8. Co je to enharmonická záměna?

9. Utvoř enharmonickou záměnu od daného tónu:



A musical staff in treble clef showing a sequence of notes and accidentals: Bb, C#, D, E, F#, G, A, B.